














KS1 MATHS HOMEWORK

Summer First Half Term Level 3

Jane made a tally chart.

Birds I saw

 stands for 5 birds

thrush		
sparrow		
blackbird		
gull		
magpie		

How many more gulls than blackbirds did she see?

Mark got into the pool at 3.30 pm.

3:30

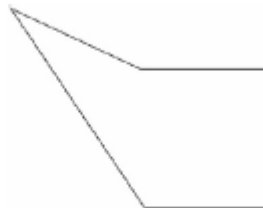
He was in the pool for 40 minutes.
At what time did he get out?

:

Draw one line which is twice as long as this line.
Use a ruler.



Look at this shape.



How many right angles does it have?

All homework tasks to be completed by Friday 19th May