



MATHS HOMEWORK

Summer First Half Term



Your teacher has left you some personalised tasks to work through on MyMaths [school log in: **bhprim** and password **angle**]. Please complete the online homework tasks remembering to click on 'Markit' at the end of each page and to save the score when complete click the 'Checkout' button highlighted in the bottom left hand corner.

The number **20** goes in **two** of the squares of this multiplication grid.


Tick (✓) the two squares where 20 goes.



x	1	2	3	4	5
1					
2					
3					
4					
5					

The table shows the cost of a new football kit.

Item	Cost
Shirt	£8.75
Shorts (1 pair)	£5.95
Socks (1 pair)	£4.15



Altogether, how much does the complete football kit cost?



£

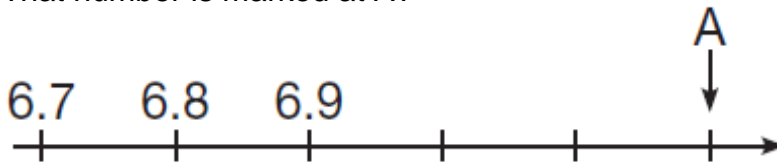
These are the opening times at Black Tower Castle.

Monday	Closed
Tuesday to Friday	11am to 6:30pm
Saturday	10am to 6pm
Sunday	10:30am to 4:30pm

How many hours is the castle open on Saturdays?

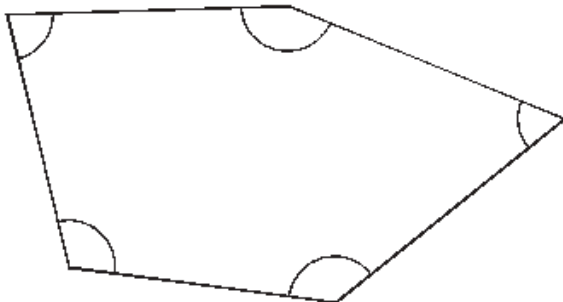


What number is marked at A?

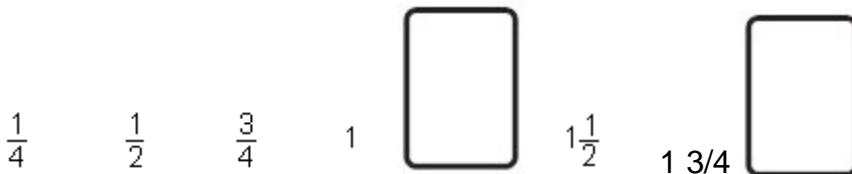


Look at this shape.

Tick (✓) each angle that is **less** than a right angle.



Write the **two** missing numbers in this sequence.



Race
Around the
Clock

Your child's x table for Race Around the Clock is highlighted in the front of their reading record.

To be handed in Friday 19th May 2017