



MATHS HOMEWORK

Spring Second Half Term



Your teacher has left you some personalised tasks to work through on MyMaths [school log in: **bhprim** and password **angle**].

Please complete the online homework tasks remembering to click on 'Markit' at the end of each page and to save the score when complete click the 'Checkout' button highlighted in the bottom left hand corner.

Calculate $42 + 16$

Calculate $47 - 25$

Write in the missing digits.

3		+		5	=	1	0	0
---	--	---	--	---	---	---	---	---

209






565

450

405

124

Write these numbers in order in the circles.



largest

smallest

Draw **all** the missing lines.

12

two tens

14

double six

20

the sum of 3 and 8

8

half of 12

6

17 subtract 9

11

Robin has these coins.



How much money does he have?

	p

Race
Around the
Clock

Your child's x table for Race Around the Clock is highlighted in the front of their reading record.