



# MATHS HOMEWORK

## Autumn Second Half Term



Your teacher has left you some personalised tasks to work through on MyMaths [school log in: **bhprim** and password **angle**].

Please complete the online homework tasks remembering to click on 'Markit' at the end of each page and to save the score when complete click the 'Checkout' button highlighted in the bottom left hand corner.

To be completed by Friday 9th December

### Rounding

Round the following numbers.


540 to the nearest 100

236 to the nearest 10

$\frac{3}{4}$  to the nearest whole number

### Money, money, money

Dev has five coins. He has £1.60 altogether. Write what the five coins could be.



### Missing Numbers

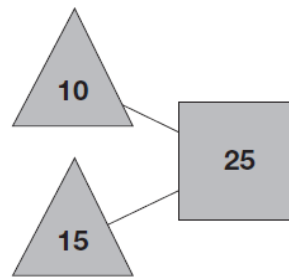
Write in the missing numbers.

$$\boxed{\phantom{000}} + 85 = 200$$

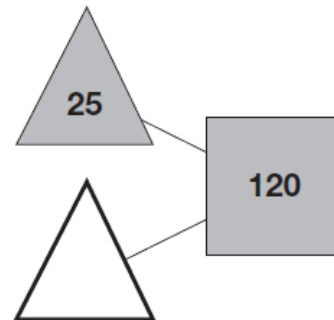
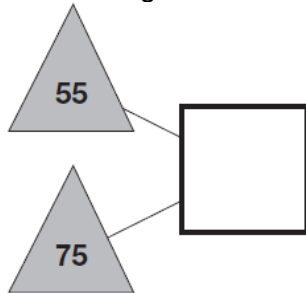
$$4 \times \boxed{\phantom{000}} = 120$$

$$120 - 51 = \boxed{\phantom{000}}$$

The numbers in the two triangles add up to the number in the square.



Using the **same** rule, write in the missing numbers.



### Shopping

Plastic cups are sold in packs of 8. Amir needs 27 cups. How many packs must he buy?

\_\_\_\_\_ packs

There are 30 paper plates in a pack.  
Amir buys 2 packs.  
He uses 37 plates.

How many plates are left?

\_\_\_\_\_ plates

Race  
Around the  
Clock

**Your child's x table for Race Around the Clock is highlighted in the front of their reading record.**