



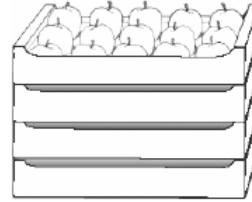
MATHS HOMEWORK 2

Autumn - Second Half Term

Continue revising for your weekly Race Around the Clock test.

Apples

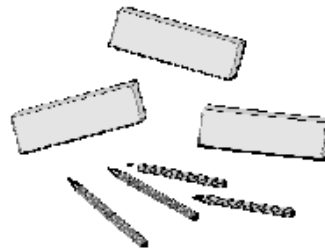
There are 15 apples in a tray.
Ling has 4 trays of apples.
How many apples does Ling have altogether?
Show how you work it out.



In the Classroom

There are 10 pencils in each box and 4 more pencils are there altogether?

pencils. How many



30 children are in the class.
How many pairs of children are there in the class?

Matching

Match each one to an answer. You may use an answer more than once.


7×5

35

2×8

40

5×2



10

$20 \div 2$

16

$45 \div 5$

15

9

Money

Desi and Ella share this money equally.
How much do they get?



| | |
|--|---|
| | p |
|--|---|

Pocket Money

Janet spent 23p. Put a circle around the 2 items she bought.



crisps 16p



orange 18p



cake 9p




biscuit 7p

She used 3 coins to pay the 23p. Put a circle around each coin she used.



Apples

John puts these apples in bags.



He puts 5 apples in each bag. How many apples will be left over?
