




MATHS HOMEWORK 1

Autumn Second Half Term

Continue revising for your weekly Race Around the Clock test.

Socks

Estimate how many pairs of socks you could make.



Now check by counting the pairs.

_____ pairs

Adding

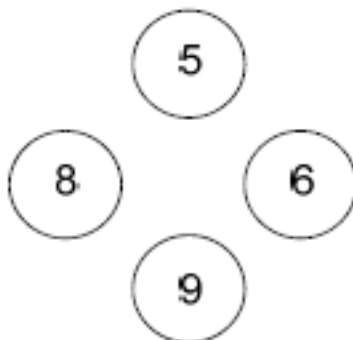
Write four different numbers to make these correct.

$$\square + \triangle = 10$$

$$\diamond + \bigcirc = 10$$

Adding and subtracting

Tick (✓) two numbers which add up to 17.

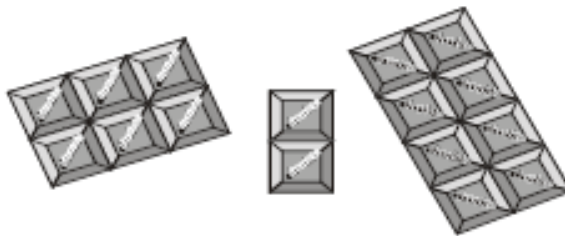


Match each subtraction to its answer.

$16 - 6$	8
$15 - 10$	9
$19 - 11$	13
$18 - 9$	10
	5

Chocolate

Look at the squares of chocolate.



There are 16 squares.

Tick (✓) the sum that matches the picture.

$$5 + 2 + 9 = 16$$

$$5 + 6 + 5 = 16$$

$$6 + 6 + 4 = 16$$

$$6 + 2 + 8 = 16$$

$$8 + 3 + 5 = 16$$

Sorting

Here are some numbers.

15

18

14



Write these numbers in the correct set.

One is done for you.

odd	even
11	

All homework tasks to be completed by Friday 9th December 2016